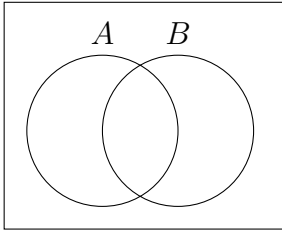
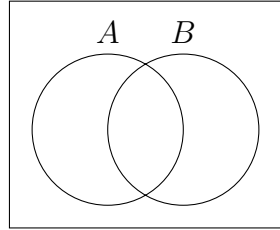


Let shade in the following sets in the Venn Diagram:

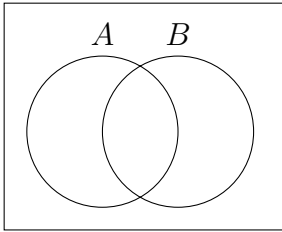
1. A



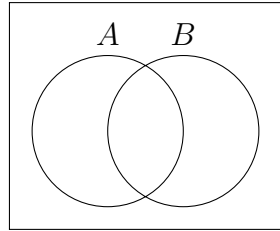
4. B^c



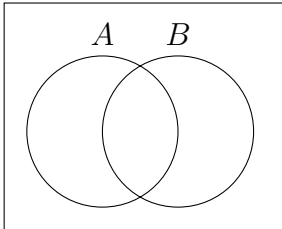
2. B



5. $A \cap B^c$



3. $A \cap B$



6. $(A \cap B) \cup (A \cap B^c)$

