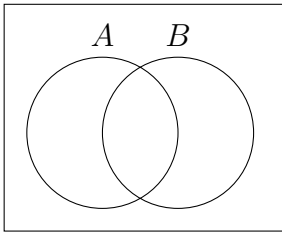
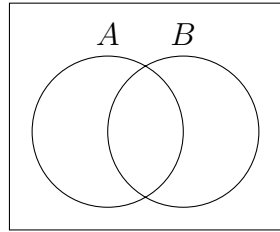


Let shade in the following sets in the Venn Diagram:

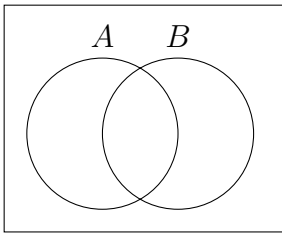
1. A



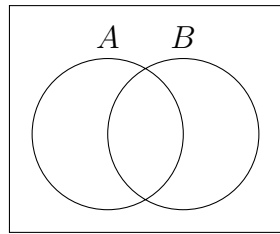
4. B^c



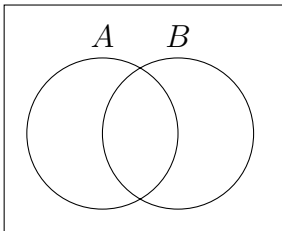
2. B



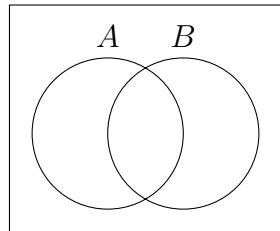
5. $A \cap B^c$



3. $A \cap B$

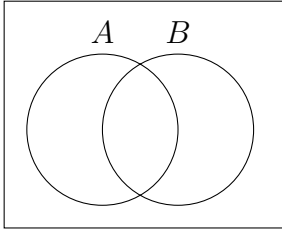


6. $(A \cap B) \cup (A \cap B^c)$

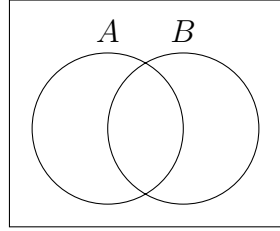


Let shade in the following sets in the Venn Diagram:

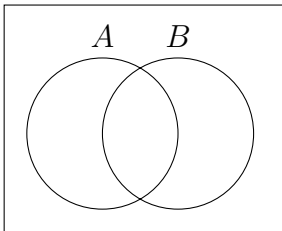
1. $A \cup B$



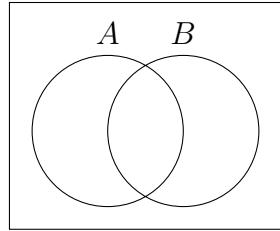
4. B^c



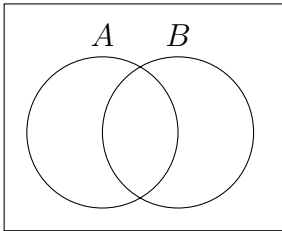
2. $A \cap B$



5. $A^c \cap B^c$



3. A^c



6. $(A \cup B)^c$

